

MESTERSIDEN

1

Navn: _____

Du kan bruge talrækken til hjælp.



2

Løs og farv.

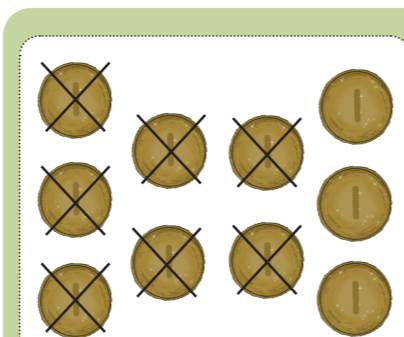


| | | | |
|-----|-----|-----|-----|
| 4-3 | 4-2 | 8-4 | 7-4 |
| 5-2 | 5-4 | 6-4 | 7-3 |
| 6-2 | 4-1 | 6-5 | 8-6 |
| 7-5 | 5-1 | 6-3 | 7-6 |



3

Løs minusstykkerne.




$$10 - 7 = 3$$



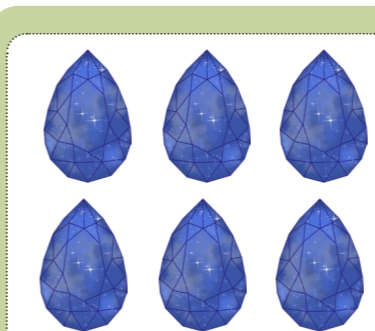
$$6 - 3 = \square$$



$$4 - 2 = \square$$



$$5 - 1 = \square$$



$$6 - 4 = \square$$



$$9 - 5 = \square$$

4

Løs minusstykkerne.

$$3 - 1 = \square$$

$$5 - 2 = \square$$

$$6 - 4 = \square$$

$$2 - 1 = \square$$

$$7 - 3 = \square$$

$$8 - 2 = \square$$

